







According to the pictograph, how many students received a grade of C or higher?

_____ students

Grades Earned 1st Quarter

A	
B	
C	
D	
F	

 = 2 students