







According to the pictograph, how many students received a passing grade (D or higher)? _____ students

Grades on Test

A	
B	
C	
D	
F	

 = 3 students